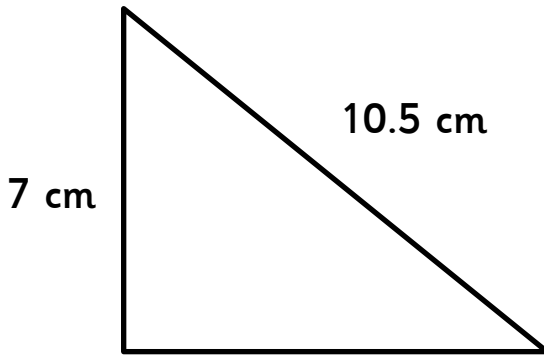


Finding the perimeter

What is the perimeter of this shape?

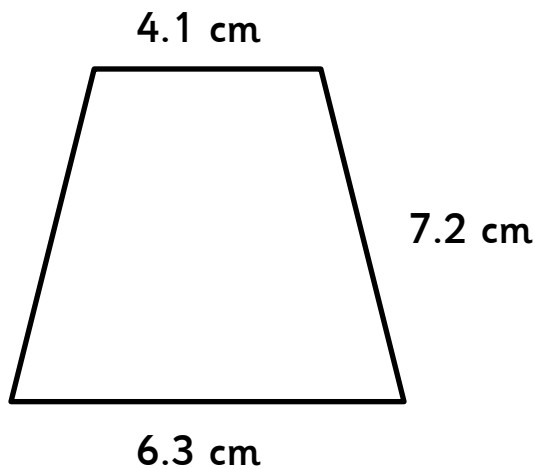


24.8cm

classroomsecrets.com

Finding the perimeter

What is the perimeter of this shape?

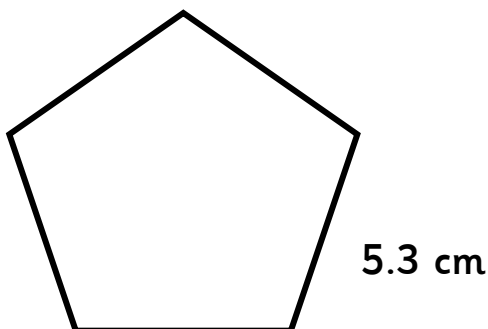


26.5cm

classroomsecrets.com

Finding the perimeter

What is the perimeter of this shape?

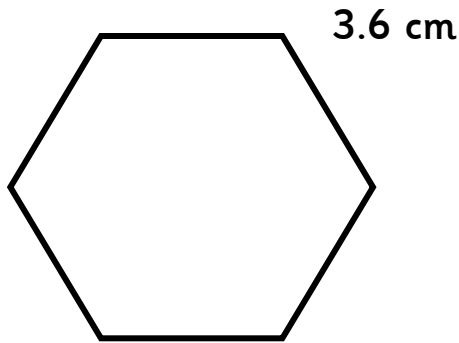


21.6 cm

classroomsecrets.com

Finding the perimeter

What is the perimeter of this shape?

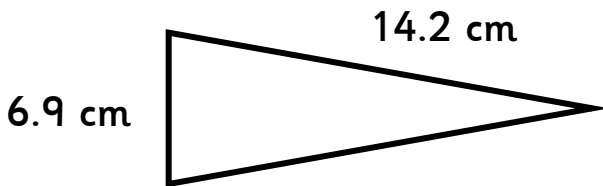


**35.3 cm**

classroomsecrets.com

Finding the perimeter

What is the perimeter of this shape?

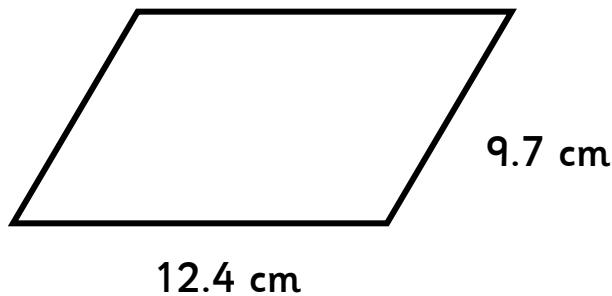


**44.2 cm**

classroomsecrets.com

Finding the perimeter

What is the perimeter of this shape?

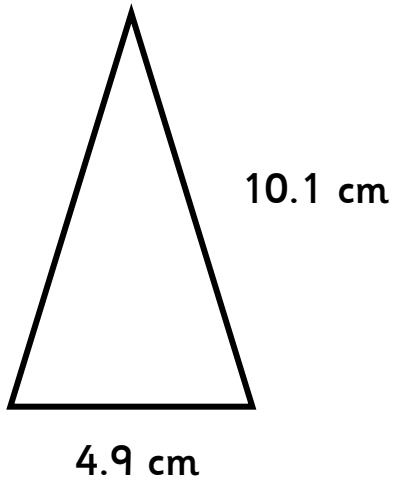


**25.1 cm**

classroomsecrets.com

Finding the perimeter

What is the perimeter of this shape?

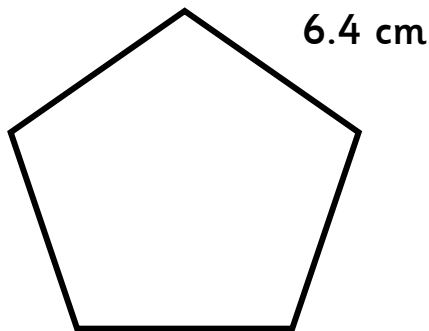


**32 cm**

classroomsecrets.com

Finding the perimeter

What is the perimeter of this shape?

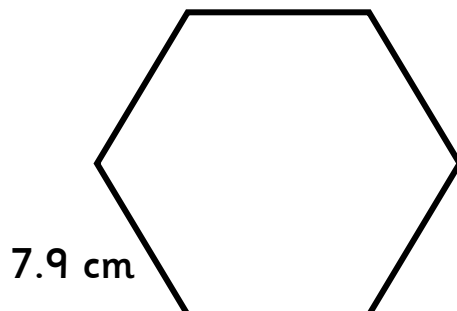


**47.4 cm**

classroomsecrets.com

Finding the perimeter

What is the perimeter of this shape?



**24.5 cm**

classroomsecrets.com